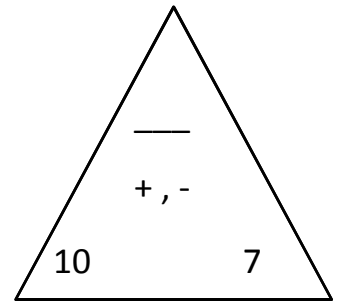
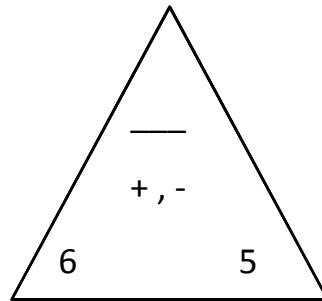
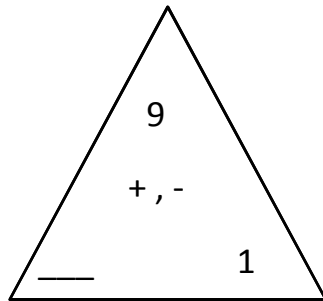
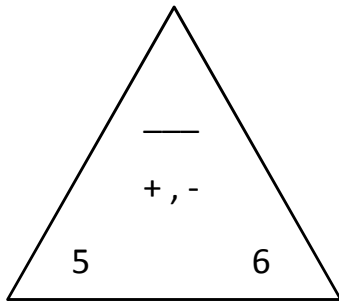


Name: \_\_\_\_\_ Date: \_\_\_\_\_ Score: \_\_\_\_\_

**+ , - Fact Triangles - fill in the missing number**



5 + 6 = 11

6 + 5 = 11

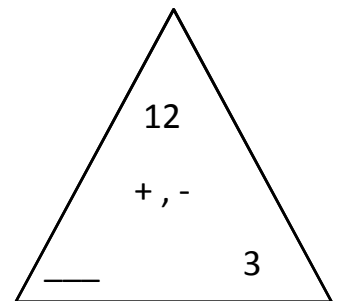
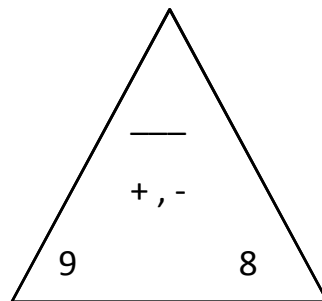
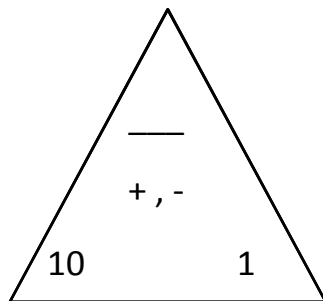
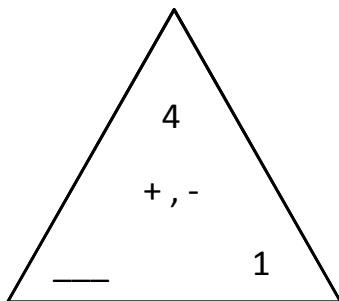
11 - 5 = 6

11 - 6 = 5

\_\_\_\_\_  
\_\_\_\_\_  
\_\_\_\_\_  
\_\_\_\_\_

\_\_\_\_\_  
\_\_\_\_\_  
\_\_\_\_\_  
\_\_\_\_\_

\_\_\_\_\_  
\_\_\_\_\_  
\_\_\_\_\_  
\_\_\_\_\_



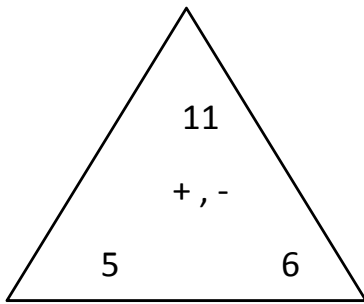
\_\_\_\_\_  
\_\_\_\_\_  
\_\_\_\_\_  
\_\_\_\_\_

\_\_\_\_\_  
\_\_\_\_\_  
\_\_\_\_\_  
\_\_\_\_\_

\_\_\_\_\_  
\_\_\_\_\_  
\_\_\_\_\_  
\_\_\_\_\_

\_\_\_\_\_  
\_\_\_\_\_  
\_\_\_\_\_  
\_\_\_\_\_

## Answers

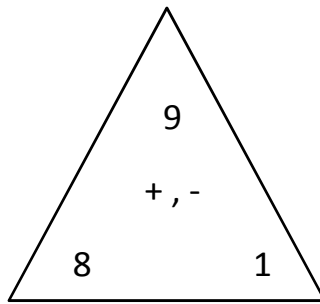


$$\underline{5 + 6 = 11}$$

$$\underline{6 + 5 = 11}$$

$$\underline{11 - 5 = 6}$$

$$\underline{11 - 6 = 5}$$

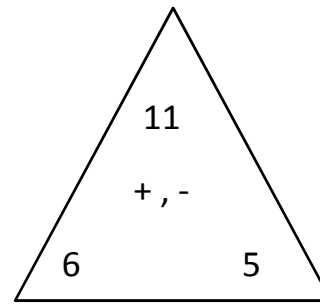


$$\underline{8 + 1 = 9}$$

$$\underline{1 + 8 = 9}$$

$$\underline{9 - 8 = 1}$$

$$\underline{9 - 1 = 8}$$

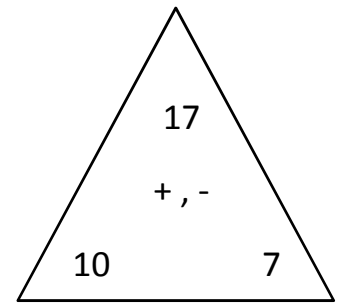


$$\underline{6 + 5 = 11}$$

$$\underline{5 + 6 = 11}$$

$$\underline{11 - 6 = 5}$$

$$\underline{11 - 5 = 6}$$

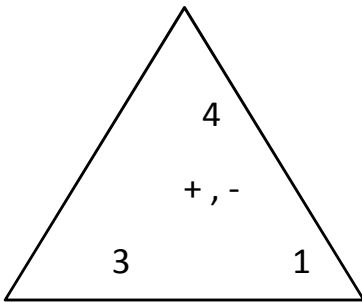


$$\underline{10 + 7 = 17}$$

$$\underline{7 + 10 = 17}$$

$$\underline{17 - 10 = 7}$$

$$\underline{17 - 7 = 10}$$

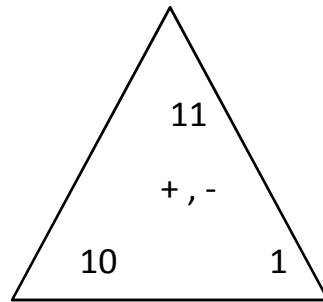


$$\underline{3 + 1 = 4}$$

$$\underline{1 + 3 = 4}$$

$$\underline{4 - 3 = 1}$$

$$\underline{4 - 1 = 3}$$

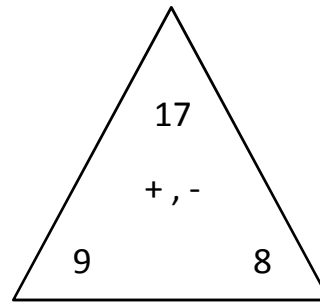


$$\underline{10 + 1 = 11}$$

$$\underline{1 + 10 = 11}$$

$$\underline{11 - 10 = 1}$$

$$\underline{11 - 1 = 10}$$

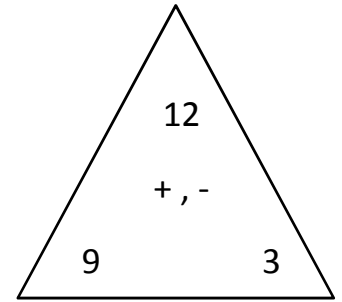


$$\underline{9 + 8 = 17}$$

$$\underline{8 + 9 = 17}$$

$$\underline{17 - 9 = 8}$$

$$\underline{17 - 8 = 9}$$



$$\underline{9 + 3 = 12}$$

$$\underline{3 + 9 = 12}$$

$$\underline{12 - 9 = 3}$$

$$\underline{12 - 3 = 9}$$