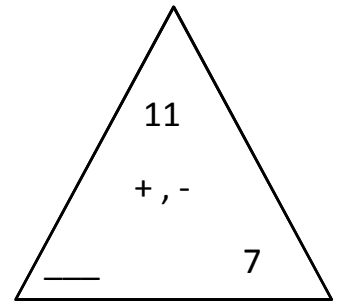
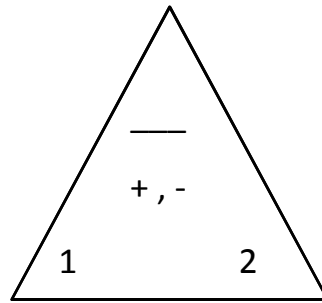
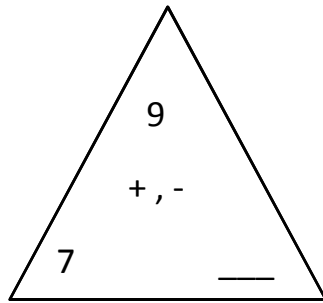
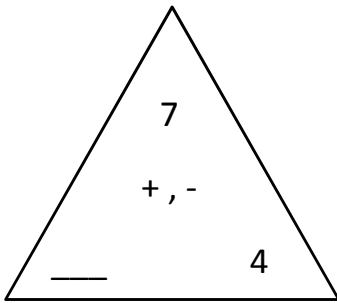


Name: _____ Date: _____ Score: _____

+ , - Fact Triangles - fill in the missing number

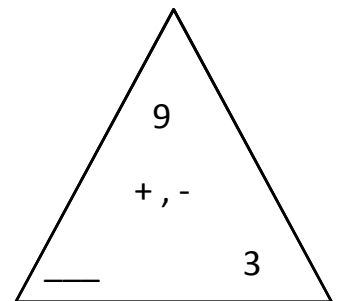
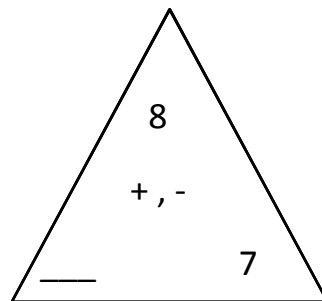
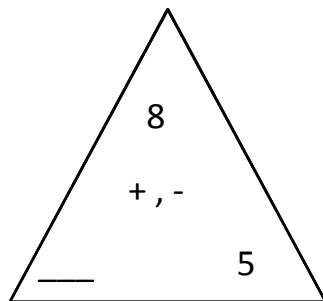
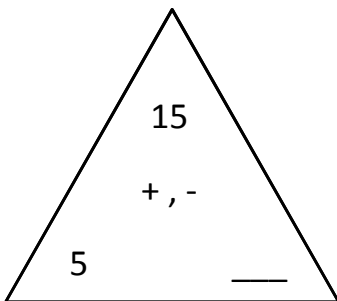


3 + 4 = 7

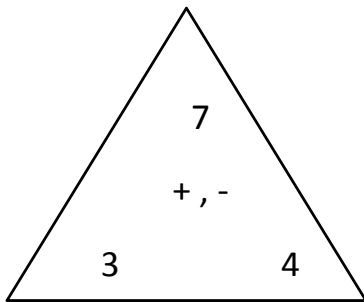
4 + 3 = 7

7 - 3 = 4

7 - 4 = 3



Answers

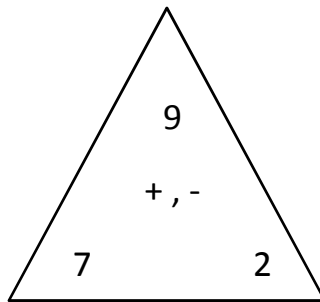


$$\underline{3 + 4 = 7}$$

$$\underline{4 + 3 = 7}$$

$$\underline{7 - 3 = 4}$$

$$\underline{7 - 4 = 3}$$

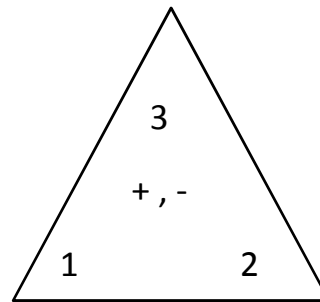


$$\underline{7 + 2 = 9}$$

$$\underline{2 + 7 = 9}$$

$$\underline{9 - 7 = 2}$$

$$\underline{9 - 2 = 7}$$

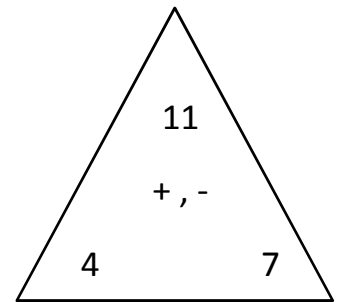


$$\underline{1 + 2 = 3}$$

$$\underline{2 + 1 = 3}$$

$$\underline{3 - 1 = 2}$$

$$\underline{3 - 2 = 1}$$

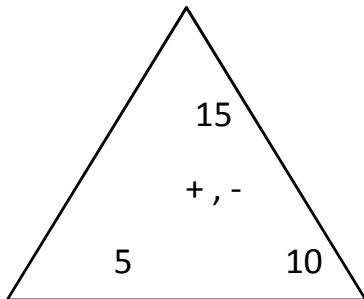


$$\underline{4 + 7 = 11}$$

$$\underline{7 + 4 = 11}$$

$$\underline{11 - 4 = 7}$$

$$\underline{11 - 7 = 4}$$

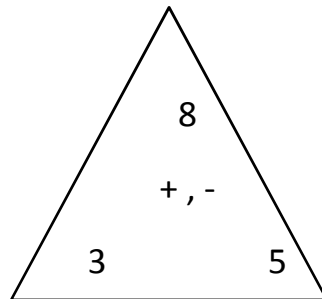


$$\underline{5 + 10 = 15}$$

$$\underline{10 + 5 = 15}$$

$$\underline{15 - 5 = 10}$$

$$\underline{15 - 10 = 5}$$

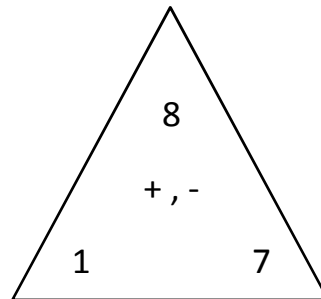


$$\underline{3 + 5 = 8}$$

$$\underline{5 + 3 = 8}$$

$$\underline{8 - 3 = 5}$$

$$\underline{8 - 5 = 3}$$

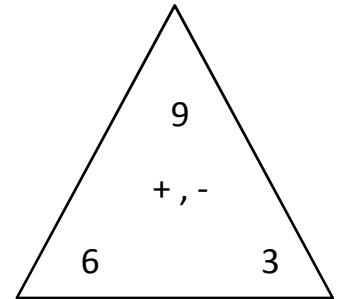


$$\underline{1 + 7 = 8}$$

$$\underline{7 + 1 = 8}$$

$$\underline{8 - 1 = 7}$$

$$\underline{8 - 7 = 1}$$



$$\underline{6 + 3 = 9}$$

$$\underline{3 + 6 = 9}$$

$$\underline{9 - 6 = 3}$$

$$\underline{9 - 3 = 6}$$