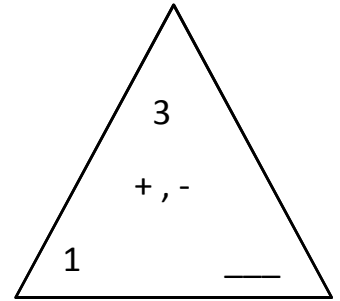
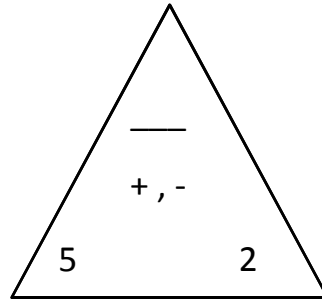
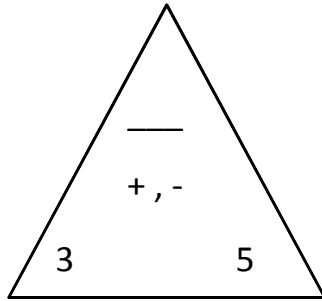
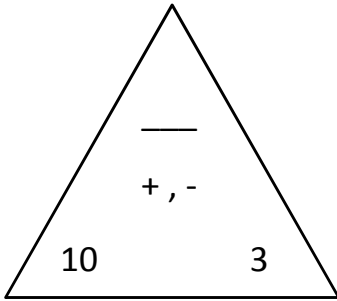


Name: \_\_\_\_\_ Date: \_\_\_\_\_ Score: \_\_\_\_\_

**+ , - Fact Triangles - fill in the missing number**

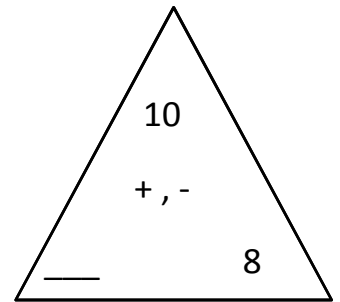
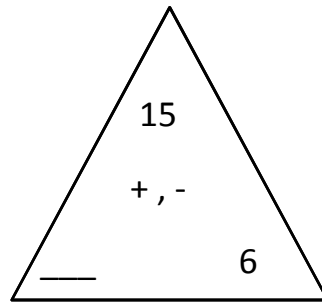
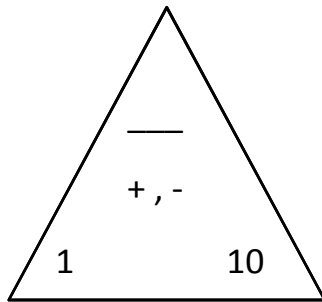
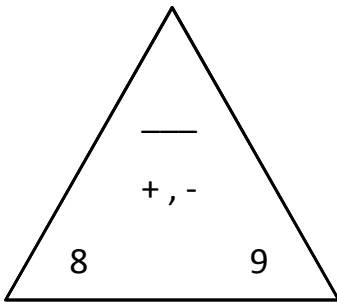


10 + 3 = 13  
3 + 10 = 13  
13 - 10 = 3  
13 - 3 = 10

\_\_\_\_\_  
\_\_\_\_\_  
\_\_\_\_\_

\_\_\_\_\_  
\_\_\_\_\_  
\_\_\_\_\_

\_\_\_\_\_  
\_\_\_\_\_  
\_\_\_\_\_



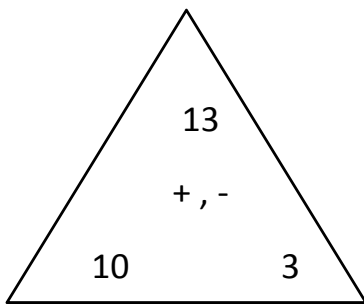
\_\_\_\_\_  
\_\_\_\_\_  
\_\_\_\_\_  
\_\_\_\_\_

\_\_\_\_\_  
\_\_\_\_\_  
\_\_\_\_\_  
\_\_\_\_\_

\_\_\_\_\_  
\_\_\_\_\_  
\_\_\_\_\_  
\_\_\_\_\_

\_\_\_\_\_  
\_\_\_\_\_  
\_\_\_\_\_  
\_\_\_\_\_

## Answers

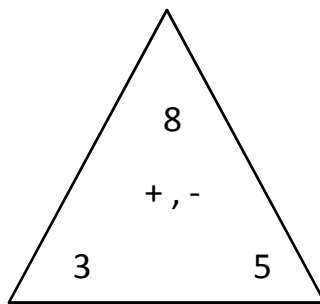


$$\underline{10 + 3 = 13}$$

$$\underline{3 + 10 = 13}$$

$$\underline{13 - 10 = 3}$$

$$\underline{13 - 3 = 10}$$

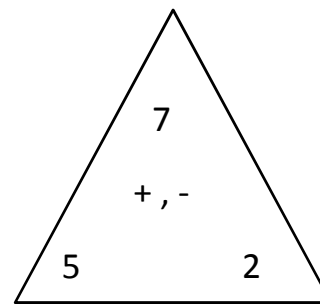


$$\underline{3 + 5 = 8}$$

$$\underline{5 + 3 = 8}$$

$$\underline{8 - 3 = 5}$$

$$\underline{8 - 5 = 3}$$

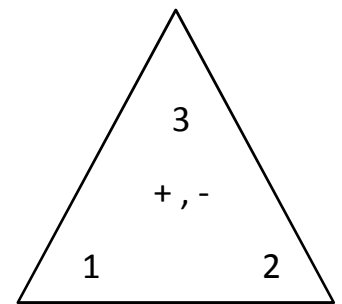


$$\underline{5 + 2 = 7}$$

$$\underline{2 + 5 = 7}$$

$$\underline{7 - 5 = 2}$$

$$\underline{7 - 2 = 5}$$

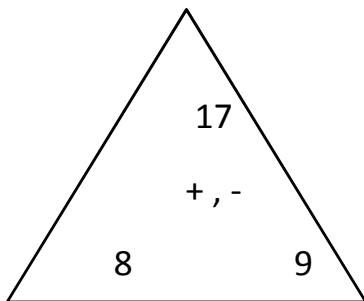


$$\underline{1 + 2 = 3}$$

$$\underline{2 + 1 = 3}$$

$$\underline{3 - 1 = 2}$$

$$\underline{3 - 2 = 1}$$

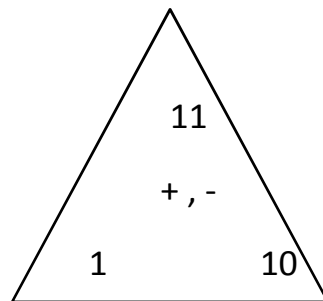


$$\underline{8 + 9 = 17}$$

$$\underline{9 + 8 = 17}$$

$$\underline{17 - 8 = 9}$$

$$\underline{17 - 9 = 8}$$

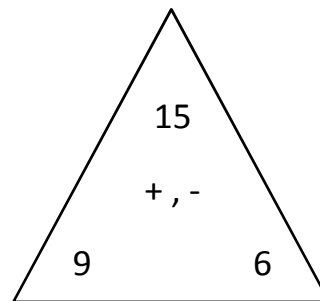


$$\underline{1 + 10 = 11}$$

$$\underline{10 + 1 = 11}$$

$$\underline{11 - 1 = 10}$$

$$\underline{11 - 10 = 1}$$

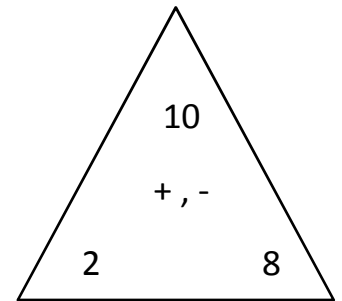


$$\underline{9 + 6 = 15}$$

$$\underline{6 + 9 = 15}$$

$$\underline{15 - 9 = 6}$$

$$\underline{15 - 6 = 9}$$



$$\underline{2 + 8 = 10}$$

$$\underline{8 + 2 = 10}$$

$$\underline{10 - 2 = 8}$$

$$\underline{10 - 8 = 2}$$