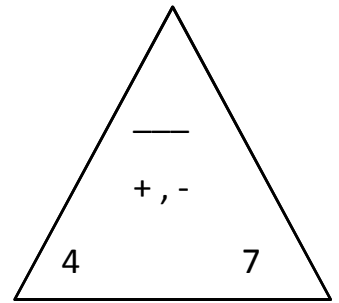
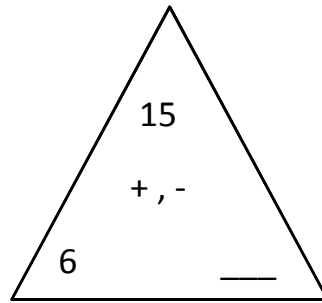
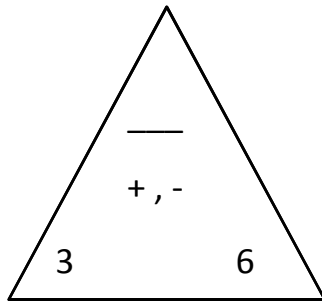
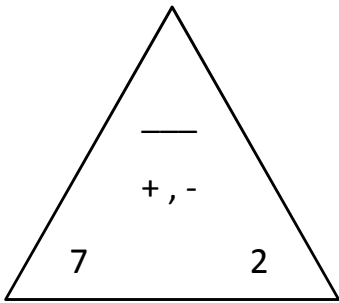


Name: _____ Date: _____ Score: _____

+ , - Fact Triangles - fill in the missing number

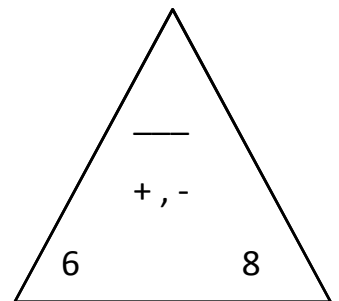
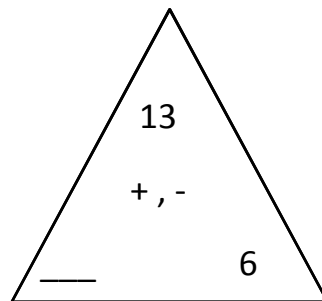
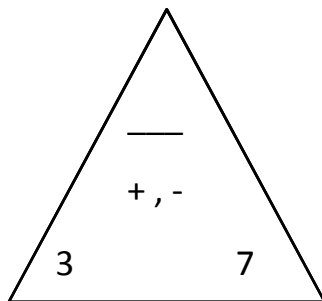
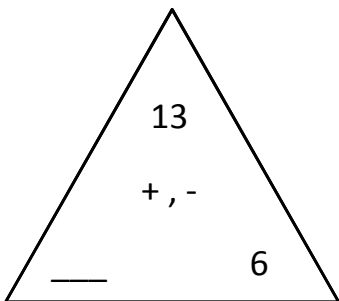


7 + 2 = 9

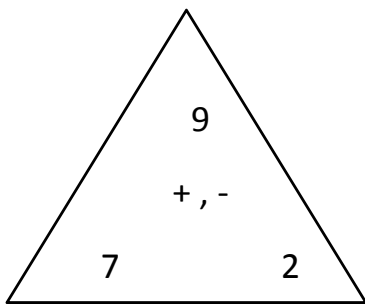
2 + 7 = 9

9 - 7 = 2

9 - 2 = 7



Answers

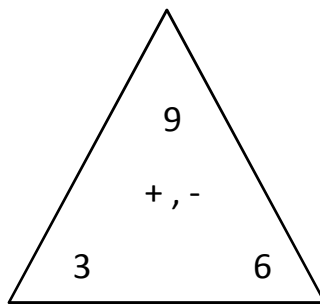


$$\underline{7 + 2 = 9}$$

$$\underline{2 + 7 = 9}$$

$$\underline{9 - 7 = 2}$$

$$\underline{9 - 2 = 7}$$

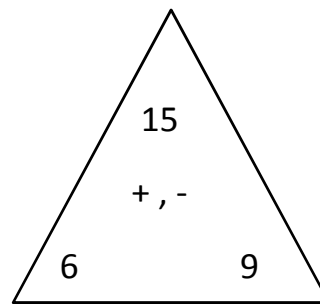


$$\underline{3 + 6 = 9}$$

$$\underline{6 + 3 = 9}$$

$$\underline{9 - 3 = 6}$$

$$\underline{9 - 6 = 3}$$

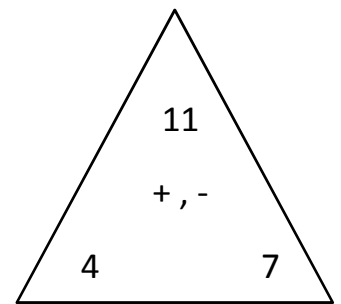


$$\underline{6 + 9 = 15}$$

$$\underline{9 + 6 = 15}$$

$$\underline{15 - 6 = 9}$$

$$\underline{15 - 9 = 6}$$

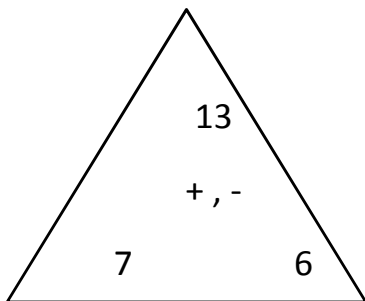


$$\underline{4 + 7 = 11}$$

$$\underline{7 + 4 = 11}$$

$$\underline{11 - 4 = 7}$$

$$\underline{11 - 7 = 4}$$

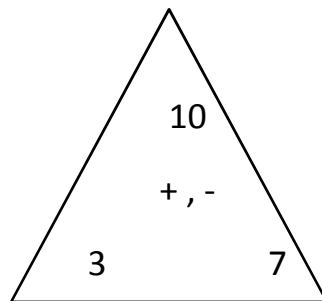


$$\underline{7 + 6 = 13}$$

$$\underline{6 + 7 = 13}$$

$$\underline{13 - 7 = 6}$$

$$\underline{13 - 6 = 7}$$

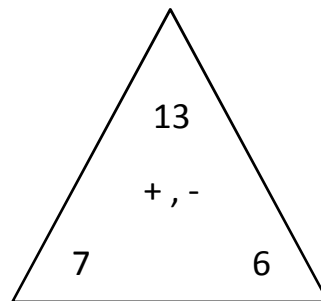


$$\underline{3 + 7 = 10}$$

$$\underline{7 + 3 = 10}$$

$$\underline{10 - 3 = 7}$$

$$\underline{10 - 7 = 3}$$

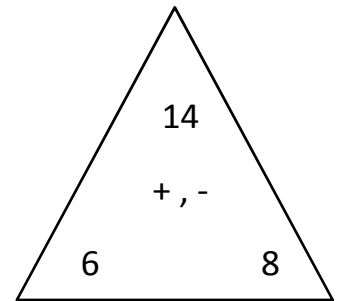


$$\underline{7 + 6 = 13}$$

$$\underline{6 + 7 = 13}$$

$$\underline{13 - 7 = 6}$$

$$\underline{13 - 6 = 7}$$



$$\underline{6 + 8 = 14}$$

$$\underline{8 + 6 = 14}$$

$$\underline{14 - 6 = 8}$$

$$\underline{14 - 8 = 6}$$