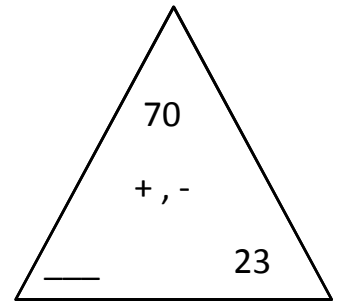
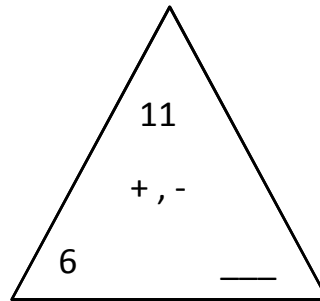
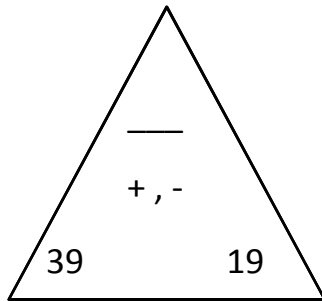
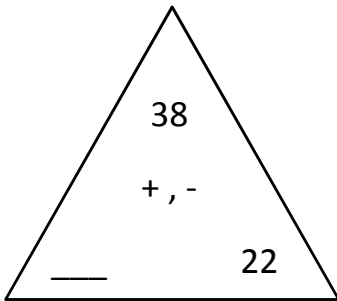


Name: _____ Date: _____ Score: _____

+ , - Fact Triangles - fill in the missing number

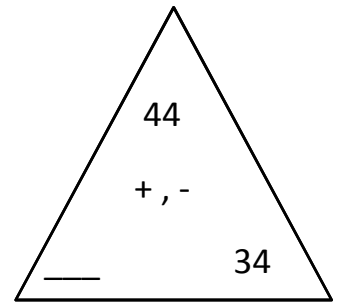
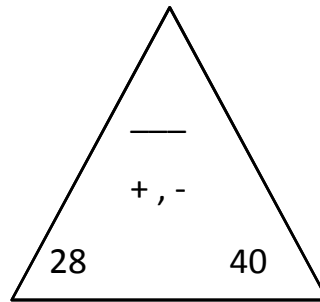
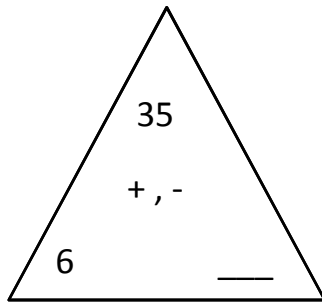
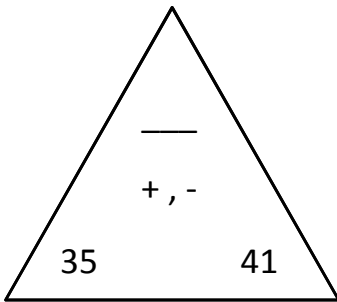


16 + 22 = 38

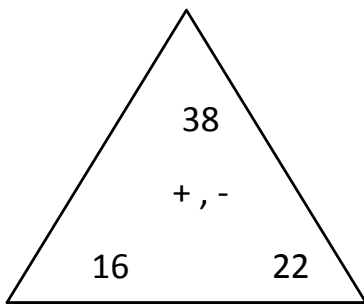
22 + 16 = 38

38 - 16 = 22

38 - 22 = 16



Answers

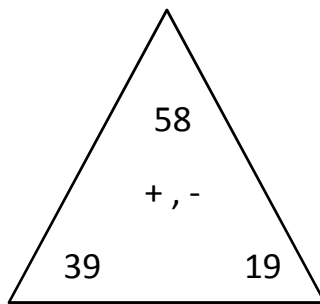


$$\underline{16 + 22 = 38}$$

$$\underline{22 + 16 = 38}$$

$$\underline{38 - 16 = 22}$$

$$\underline{38 - 22 = 16}$$

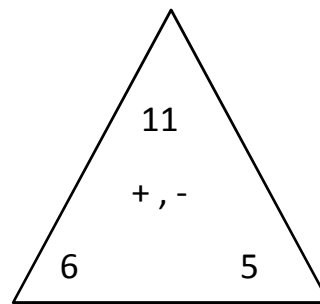


$$\underline{39 + 19 = 58}$$

$$\underline{19 + 39 = 58}$$

$$\underline{58 - 39 = 19}$$

$$\underline{58 - 19 = 39}$$

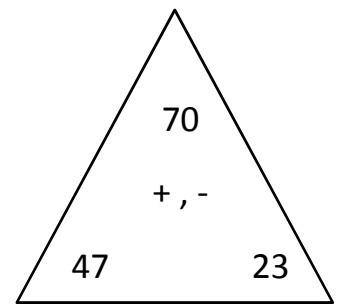


$$\underline{6 + 5 = 11}$$

$$\underline{5 + 6 = 11}$$

$$\underline{11 - 6 = 5}$$

$$\underline{11 - 5 = 6}$$

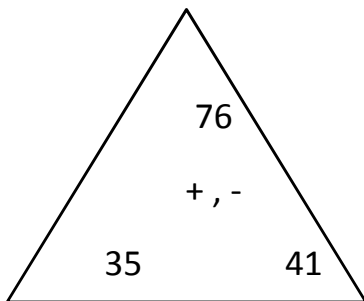


$$\underline{47 + 23 = 70}$$

$$\underline{23 + 47 = 70}$$

$$\underline{70 - 47 = 23}$$

$$\underline{70 - 23 = 47}$$

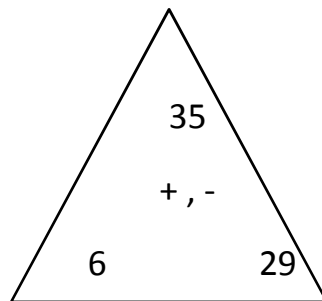


$$\underline{35 + 41 = 76}$$

$$\underline{41 + 35 = 76}$$

$$\underline{76 - 35 = 41}$$

$$\underline{76 - 41 = 35}$$

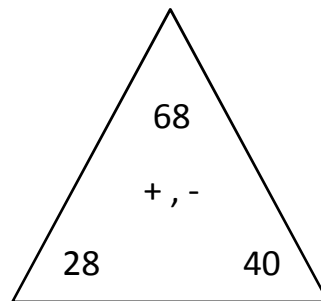


$$\underline{6 + 29 = 35}$$

$$\underline{29 + 6 = 35}$$

$$\underline{35 - 6 = 29}$$

$$\underline{35 - 29 = 6}$$

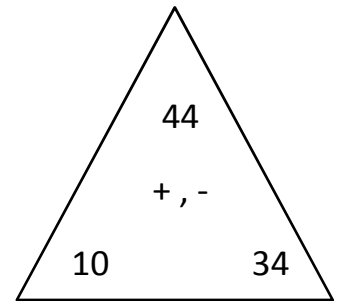


$$\underline{28 + 40 = 68}$$

$$\underline{40 + 28 = 68}$$

$$\underline{68 - 28 = 40}$$

$$\underline{68 - 40 = 28}$$



$$\underline{10 + 34 = 44}$$

$$\underline{34 + 10 = 44}$$

$$\underline{44 - 10 = 34}$$

$$\underline{44 - 34 = 10}$$