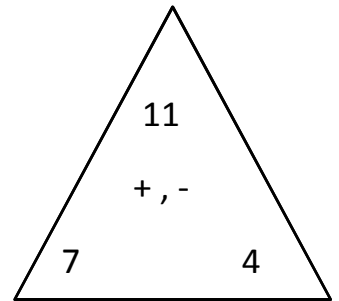
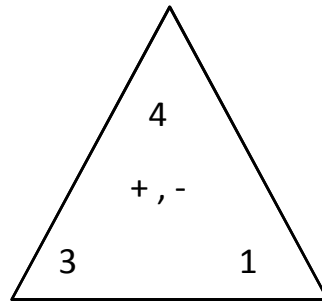
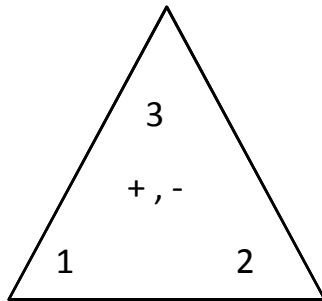
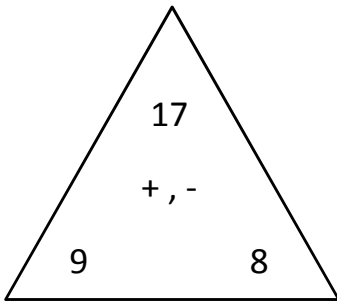
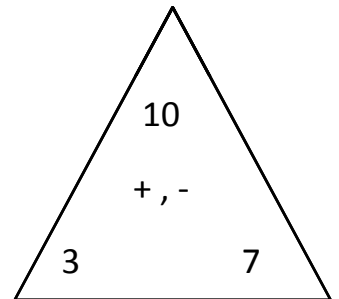
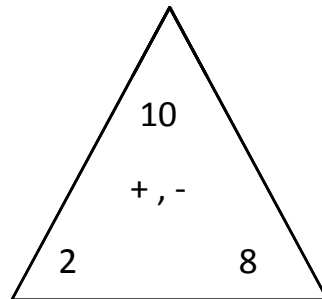
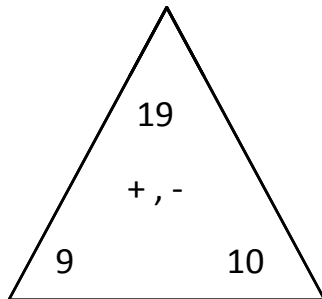
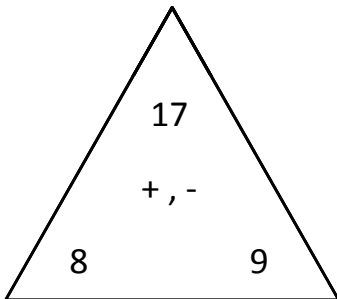


Name: _____ Date: _____ Score: _____

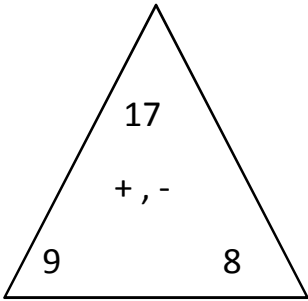
+ , - Fact Triangles



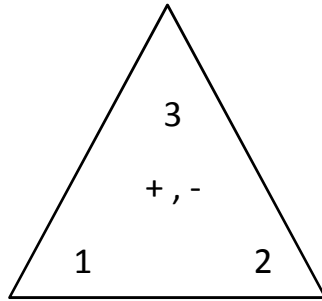
$$\begin{array}{r} 9 + 8 = 17 \\ \hline 8 + 9 = 17 \\ \hline 17 - 9 = 8 \\ \hline 17 - 8 = 9 \end{array}$$



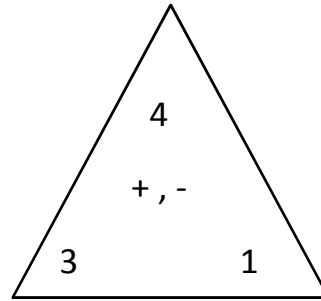
Answers



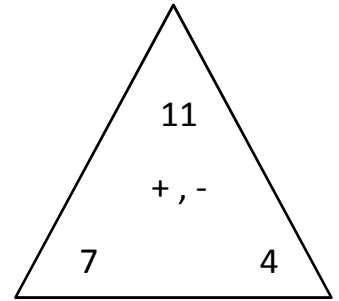
$$\begin{array}{r} 9 + 8 = 17 \\ \hline 8 + 9 = 17 \\ \hline 17 - 9 = 8 \\ \hline 17 - 8 = 9 \end{array}$$



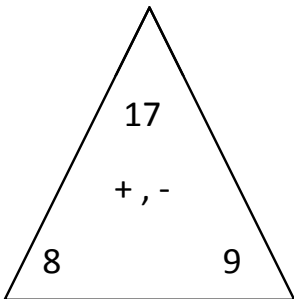
$$\begin{array}{r} 1 + 2 = 3 \\ \hline 2 + 1 = 3 \\ \hline 3 - 1 = 2 \\ \hline 3 - 2 = 1 \end{array}$$



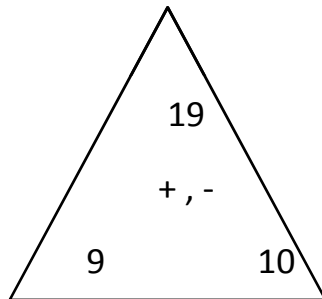
$$\begin{array}{r} 3 + 1 = 4 \\ \hline 1 + 3 = 4 \\ \hline 4 - 3 = 1 \\ \hline 4 - 1 = 3 \end{array}$$



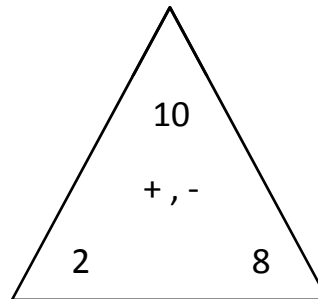
$$\begin{array}{r} 7 + 4 = 11 \\ \hline 4 + 7 = 11 \\ \hline 11 - 7 = 4 \\ \hline 11 - 4 = 7 \end{array}$$



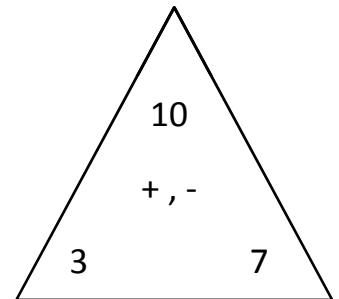
$$\begin{array}{r} 8 + 9 = 17 \\ \hline 9 + 8 = 17 \\ \hline 17 - 8 = 9 \\ \hline 17 - 9 = 8 \end{array}$$



$$\begin{array}{r} 9 + 10 = 19 \\ \hline 10 + 9 = 19 \\ \hline 19 - 9 = 10 \\ \hline 19 - 10 = 9 \end{array}$$



$$\begin{array}{r} 2 + 8 = 10 \\ \hline 8 + 2 = 10 \\ \hline 10 - 2 = 8 \\ \hline 10 - 8 = 2 \end{array}$$



$$\begin{array}{r} 3 + 7 = 10 \\ \hline 7 + 3 = 10 \\ \hline 10 - 3 = 7 \\ \hline 10 - 7 = 3 \end{array}$$