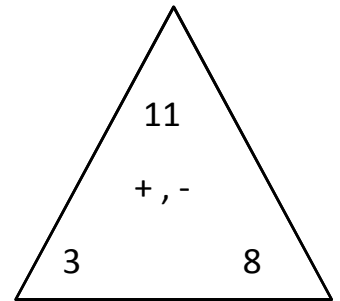
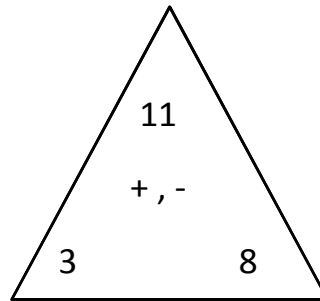
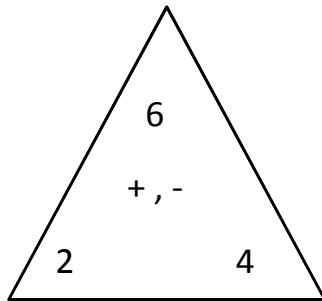
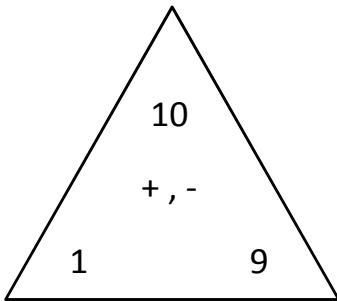


Name: \_\_\_\_\_ Date: \_\_\_\_\_ Score: \_\_\_\_\_

### + , - Fact Triangles



$$\begin{array}{r} 1 + 9 = 10 \\ \hline 9 + 1 = 10 \\ \hline 10 - 1 = 9 \\ \hline 10 - 9 = 1 \end{array}$$

---

---

---

---

---

---

---

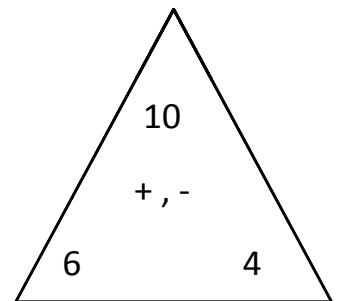
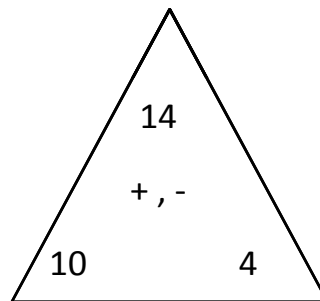
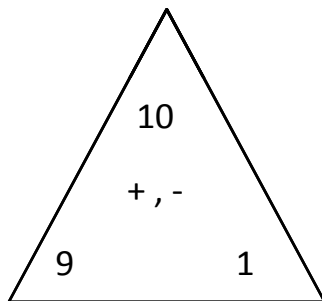
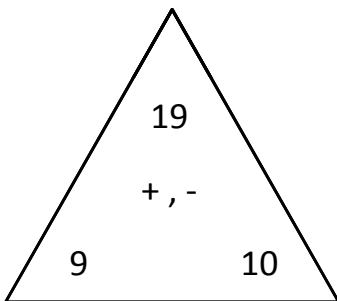
---

---

---

---

---



---

---

---

---

---

---

---

---

---

---

---

---

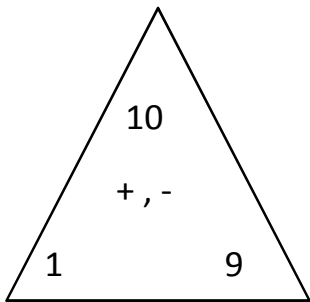
---

---

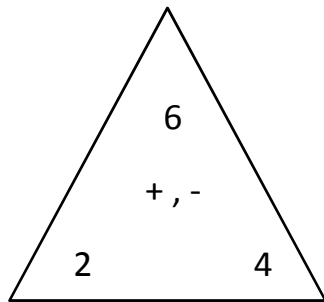
---

---

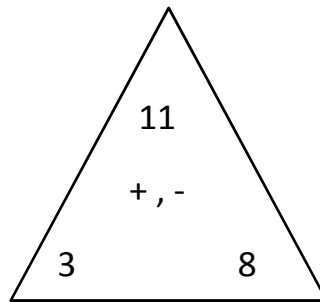
## Answers



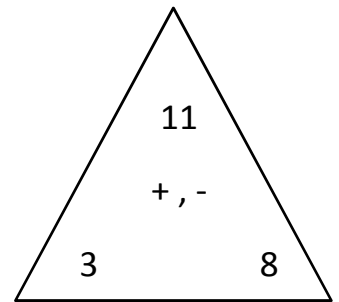
$$\begin{array}{r} 1 + 9 = 10 \\ \hline 9 + 1 = 10 \\ \hline 10 - 1 = 9 \\ \hline 10 - 9 = 1 \end{array}$$



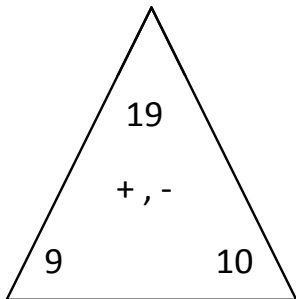
$$\begin{array}{r} 2 + 4 = 6 \\ \hline 4 + 2 = 6 \\ \hline 6 - 2 = 4 \\ \hline 6 - 4 = 2 \end{array}$$



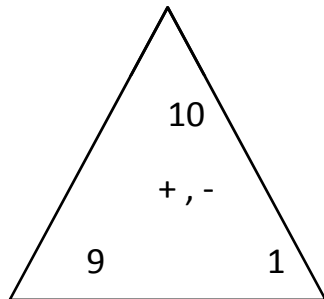
$$\begin{array}{r} 3 + 8 = 11 \\ \hline 8 + 3 = 11 \\ \hline 11 - 3 = 8 \\ \hline 11 - 8 = 3 \end{array}$$



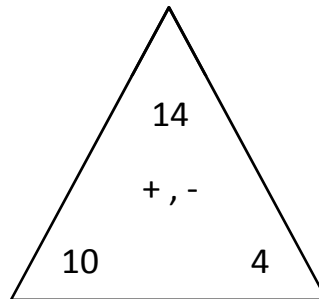
$$\begin{array}{r} 3 + 8 = 11 \\ \hline 8 + 3 = 11 \\ \hline 11 - 3 = 8 \\ \hline 11 - 8 = 3 \end{array}$$



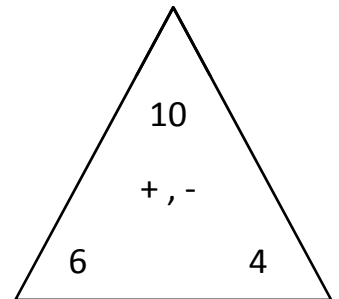
$$\begin{array}{r} 9 + 10 = 19 \\ \hline 10 + 9 = 19 \\ \hline 19 - 9 = 10 \\ \hline 19 - 10 = 9 \end{array}$$



$$\begin{array}{r} 9 + 1 = 10 \\ \hline 1 + 9 = 10 \\ \hline 10 - 9 = 1 \\ \hline 10 - 1 = 9 \end{array}$$



$$\begin{array}{r} 10 + 4 = 14 \\ \hline 4 + 10 = 14 \\ \hline 14 - 10 = 4 \\ \hline 14 - 4 = 10 \end{array}$$



$$\begin{array}{r} 6 + 4 = 10 \\ \hline 4 + 6 = 10 \\ \hline 10 - 6 = 4 \\ \hline 10 - 4 = 6 \end{array}$$