

















Name: _____ Date: _____ Score: _____





Counting Coins: make the sum with the fewest





1.)  +  +  +  = 10 ¢





2.)     = 17 ¢





3.)     = 6 ¢





4.)     = 15 ¢





5.)     = 25 ¢

6.)     = 1 ¢









































7.)     = 9 ¢

8.)     = 16 ¢

9.)     = 6 ¢

10.)     = 11 ¢

Answers

- 1). $\boxed{0}$  + $\boxed{1}$  + $\boxed{0}$  + $\boxed{0}$  = 10 ¢
- 2). $\boxed{0}$  + $\boxed{1}$  + $\boxed{1}$  + $\boxed{2}$  = 17 ¢
- 3). $\boxed{0}$  + $\boxed{0}$  + $\boxed{1}$  + $\boxed{1}$  = 6 ¢
- 4). $\boxed{0}$  + $\boxed{1}$  + $\boxed{1}$  + $\boxed{0}$  = 15 ¢
- 5). $\boxed{1}$  + $\boxed{0}$  + $\boxed{0}$  + $\boxed{0}$  = 25 ¢
- 6). $\boxed{0}$  + $\boxed{0}$  + $\boxed{0}$  + $\boxed{1}$  = 1 ¢
- 7). $\boxed{0}$  + $\boxed{0}$  + $\boxed{1}$  + $\boxed{4}$  = 9 ¢
- 8). $\boxed{0}$  + $\boxed{1}$  + $\boxed{1}$  + $\boxed{1}$  = 16 ¢
- 9). $\boxed{0}$  + $\boxed{0}$  + $\boxed{1}$  + $\boxed{1}$  = 6 ¢
- 10). $\boxed{0}$  + $\boxed{1}$  + $\boxed{0}$  + $\boxed{1}$  = 11 ¢