

















Name: _____ Date: _____ Score: _____





Counting Coins: make the sum with the fewest





1).  +  +  +  = 36 ¢





2).     = 37 ¢





3).     = 30 ¢





4).     = 8 ¢





5).     = 25 ¢

6).     = 47 ¢









































7).     = 37 ¢

8).     = 36 ¢

9).     = 21 ¢

10).     = 31 ¢

Answers

- 1). $\boxed{1}$  + $\boxed{1}$  + $\boxed{0}$  + $\boxed{1}$  = 36 ¢
- 2). $\boxed{1}$  + $\boxed{1}$  + $\boxed{0}$  + $\boxed{2}$  = 37 ¢
- 3). $\boxed{1}$  + $\boxed{0}$  + $\boxed{1}$  + $\boxed{0}$  = 30 ¢
- 4). $\boxed{0}$  + $\boxed{0}$  + $\boxed{1}$  + $\boxed{3}$  = 8 ¢
- 5). $\boxed{1}$  + $\boxed{0}$  + $\boxed{0}$  + $\boxed{0}$  = 25 ¢
- 6). $\boxed{1}$  + $\boxed{2}$  + $\boxed{0}$  + $\boxed{2}$  = 47 ¢
- 7). $\boxed{1}$  + $\boxed{1}$  + $\boxed{0}$  + $\boxed{2}$  = 37 ¢
- 8). $\boxed{1}$  + $\boxed{1}$  + $\boxed{0}$  + $\boxed{1}$  = 36 ¢
- 9). $\boxed{0}$  + $\boxed{2}$  + $\boxed{0}$  + $\boxed{1}$  = 21 ¢
- 10). $\boxed{1}$  + $\boxed{0}$  + $\boxed{1}$  + $\boxed{1}$  = 31 ¢